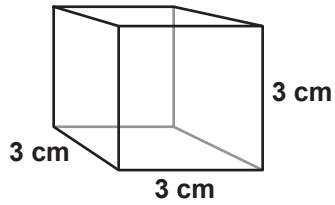
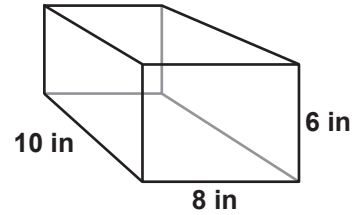


Volume

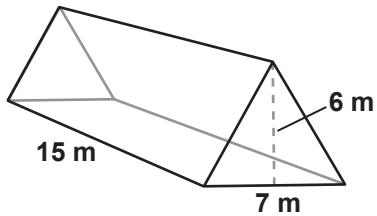
1 Find the volume of this cube.



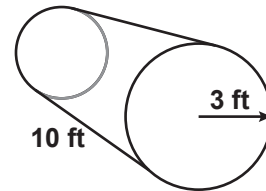
2 Find the volume of this rectangular prism.



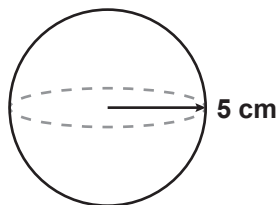
3 Find the volume of this triangular prism.



4 Find the volume of this cylinder.



5 Find the volume of this sphere.



6 Find the volume of this cone.

