

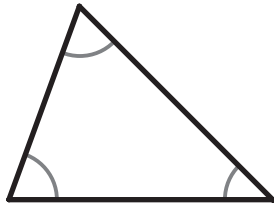
Classifying Triangles (by Angles)

G-TRI 1

Instructions: For each triangle, mark the box that matches its type when classifying by angles.

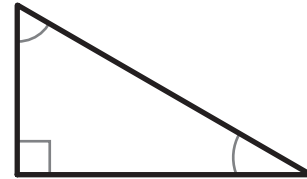
1

- Acute
 Right
 Obtuse



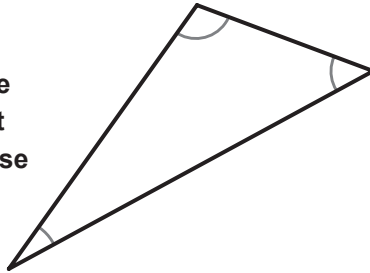
2

- Acute
 Right
 Obtuse



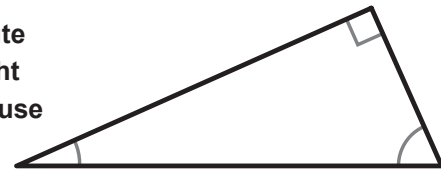
3

- Acute
 Right
 Obtuse



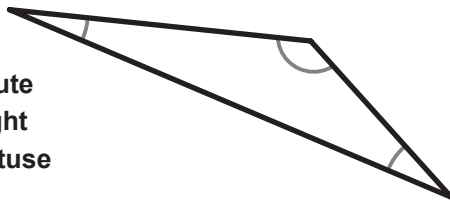
4

- Acute
 Right
 Obtuse



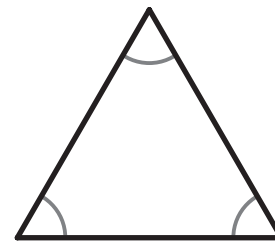
5

- Acute
 Right
 Obtuse



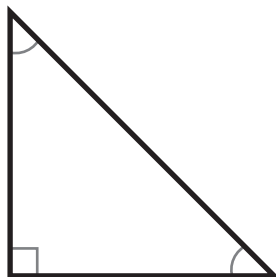
6

- Acute
 Right
 Obtuse



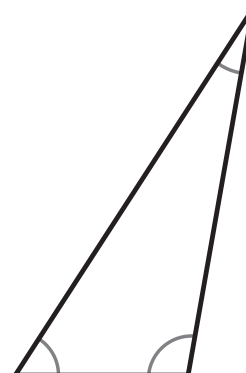
7

- Acute
 Right
 Obtuse



8

- Acute
 Right
 Obtuse



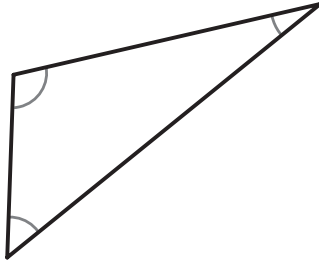
Classifying Triangles (by Sides)

G-TRI 2

Instructions: For each triangle, mark the box that matches its type when classifying by sides. The marks on the sides of the triangles show when two sides are "congruent" or the same length.

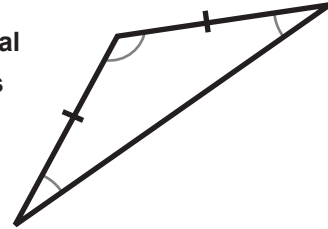
1

- Equilateral
 Isosceles
 Scalene



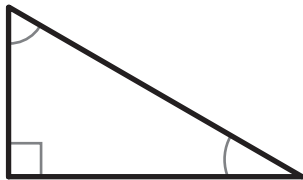
2

- Equilateral
 Isosceles
 Scalene



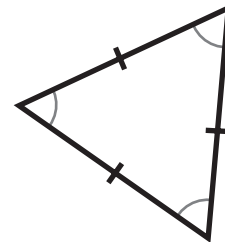
3

- Equilateral
 Isosceles
 Scalene



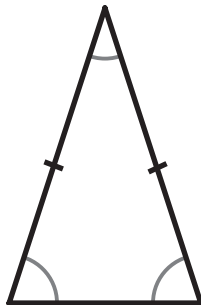
4

- Equilateral
 Isosceles
 Scalene



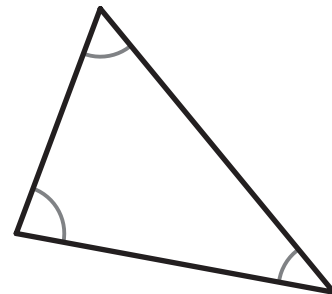
5

- Equilateral
 Isosceles
 Scalene



6

- Equilateral
 Isosceles
 Scalene



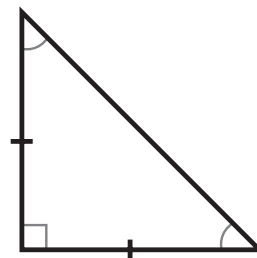
7

- Equilateral
 Isosceles
 Scalene



8

- Equilateral
 Isosceles
 Scalene

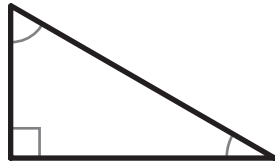


Classifying Triangles (by both Angle and Sides)

G-TRI 3

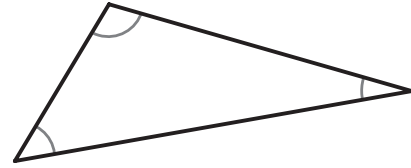
Instructions: For each triangle, mark the box from each category that matches its type. The marks on the sides of the triangles show when two sides are "congruent" or the same length.

1



- | | |
|---|---|
| <input type="checkbox"/> Acute | <input type="checkbox"/> Equilateral |
| <input checked="" type="checkbox"/> Right | <input type="checkbox"/> Isosceles |
| <input type="checkbox"/> Obtuse | <input checked="" type="checkbox"/> Scalene |

2



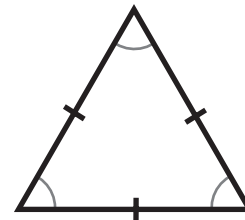
- | | |
|---------------------------------|--------------------------------------|
| <input type="checkbox"/> Acute | <input type="checkbox"/> Equilateral |
| <input type="checkbox"/> Right | <input type="checkbox"/> Isosceles |
| <input type="checkbox"/> Obtuse | <input type="checkbox"/> Scalene |

3



- | | |
|---------------------------------|--------------------------------------|
| <input type="checkbox"/> Acute | <input type="checkbox"/> Equilateral |
| <input type="checkbox"/> Right | <input type="checkbox"/> Isosceles |
| <input type="checkbox"/> Obtuse | <input type="checkbox"/> Scalene |

4



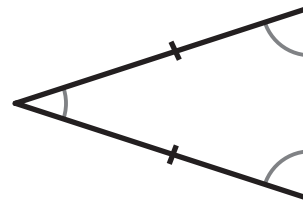
- | | |
|---------------------------------|--------------------------------------|
| <input type="checkbox"/> Acute | <input type="checkbox"/> Equilateral |
| <input type="checkbox"/> Right | <input type="checkbox"/> Isosceles |
| <input type="checkbox"/> Obtuse | <input type="checkbox"/> Scalene |

5



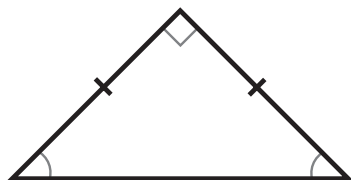
- | | |
|---------------------------------|--------------------------------------|
| <input type="checkbox"/> Acute | <input type="checkbox"/> Equilateral |
| <input type="checkbox"/> Right | <input type="checkbox"/> Isosceles |
| <input type="checkbox"/> Obtuse | <input type="checkbox"/> Scalene |

6



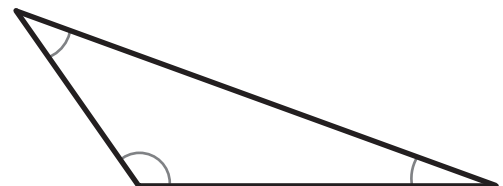
- | | |
|---------------------------------|--------------------------------------|
| <input type="checkbox"/> Acute | <input type="checkbox"/> Equilateral |
| <input type="checkbox"/> Right | <input type="checkbox"/> Isosceles |
| <input type="checkbox"/> Obtuse | <input type="checkbox"/> Scalene |

7



- | | |
|---------------------------------|--------------------------------------|
| <input type="checkbox"/> Acute | <input type="checkbox"/> Equilateral |
| <input type="checkbox"/> Right | <input type="checkbox"/> Isosceles |
| <input type="checkbox"/> Obtuse | <input type="checkbox"/> Scalene |

8



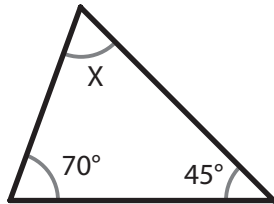
- | | |
|---------------------------------|--------------------------------------|
| <input type="checkbox"/> Acute | <input type="checkbox"/> Equilateral |
| <input type="checkbox"/> Right | <input type="checkbox"/> Isosceles |
| <input type="checkbox"/> Obtuse | <input type="checkbox"/> Scalene |

Finding an Unknown Angle

G-TRI 4

Instructions: For each triangle, find the unknown angle (X). Remember that for each triangle, the three interior angles must add up to 180 degrees.

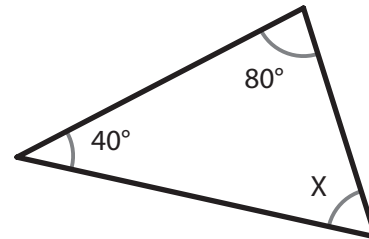
1



$$m\angle X = \underline{65^\circ}$$

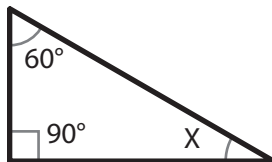
$$\begin{array}{r} 70 \\ + 45 \\ \hline 115 \end{array} \quad \begin{array}{r} 180 \\ - 115 \\ \hline 65 \end{array}$$

2



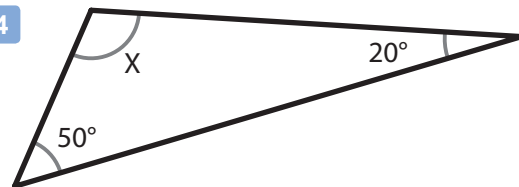
$$m\angle X = \underline{\hspace{2cm}}$$

3



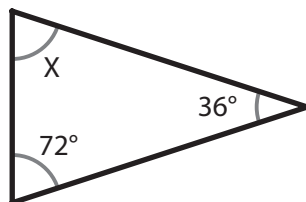
$$m\angle X = \underline{\hspace{2cm}}$$

4



$$m\angle X = \underline{\hspace{2cm}}$$

5



$$m\angle X = \underline{\hspace{2cm}}$$

6



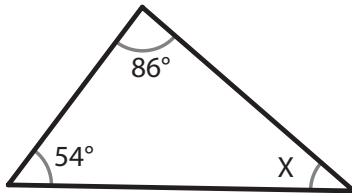
$$m\angle X = \underline{\hspace{2cm}}$$

Finding an Unknown Angle - Set 2

G-TRI 5

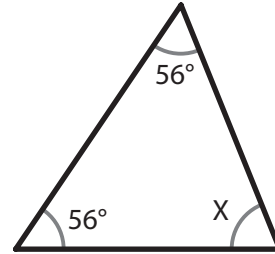
Instructions: For each triangle, find the unknown angle (X). Remember that for each triangle, the three interior angles must add up to 180 degrees.

1



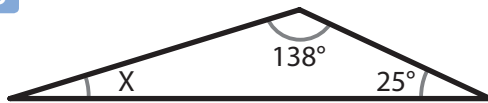
$m\angle X = \underline{\hspace{2cm}}$

2



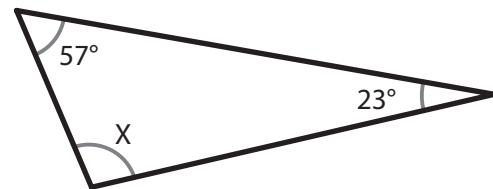
$m\angle X = \underline{\hspace{2cm}}$

3



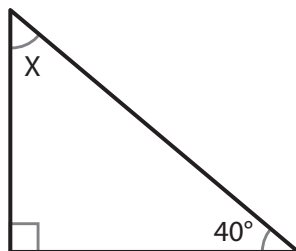
$m\angle X = \underline{\hspace{2cm}}$

4



$m\angle X = \underline{\hspace{2cm}}$

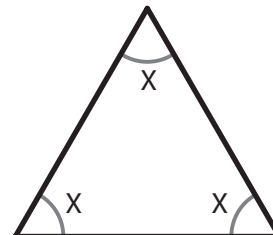
5



$m\angle X = \underline{\hspace{2cm}}$

6

An equilateral triangle always has three equal angles. What is their measure?



$m\angle X = \underline{\hspace{2cm}}$