

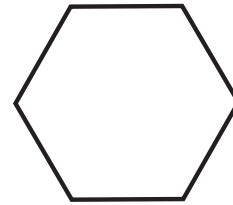
Polygons

In this exercise set, you get to play a game of:




Look at each object and mark the correct box.

1



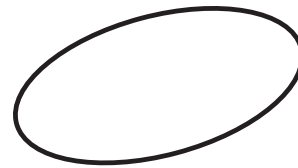
Polygon NOT a Polygon

2



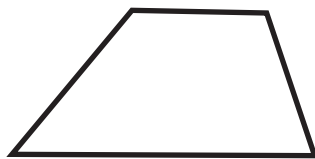
Polygon NOT a Polygon

3




Polygon NOT a Polygon

4



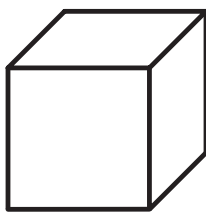
Polygon NOT a Polygon

5




Polygon NOT a Polygon

6



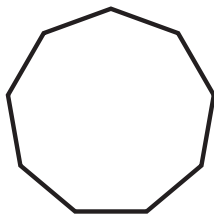
Polygon NOT a Polygon

7



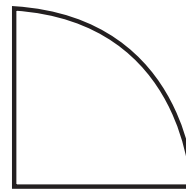
Polygon NOT a Polygon

8



Polygon NOT a Polygon

9



Polygon NOT a Polygon