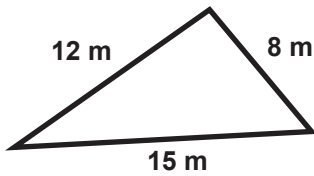
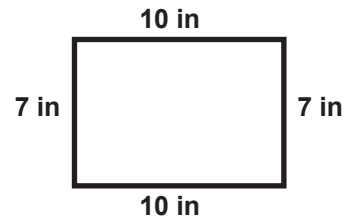


## Perimeter

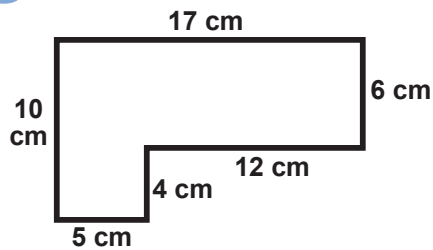
1 Find the perimeter of this triangle.



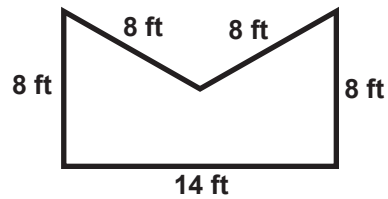
2 Find the perimeter of this rectangle.



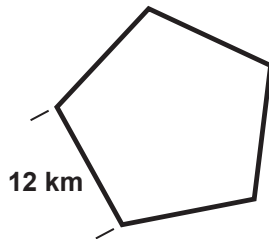
3 Find the perimeter of this polygon.



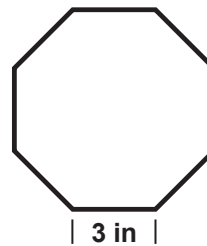
4 Find the perimeter of this polygon.



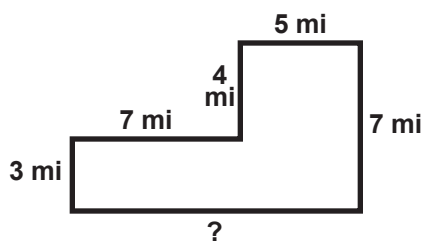
5 Find the perimeter of this **regular** pentagon.



6 Find the perimeter of this **regular** octagon.



7 Find the perimeter. Use what you do know to find the side you don't know.



8 Find the perimeter.

