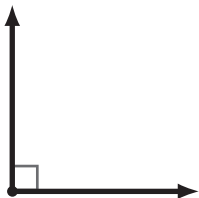
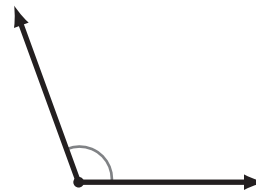


Angle Basics

1 What kind of angle is this? right



2 What kind of angle is this? obtuse



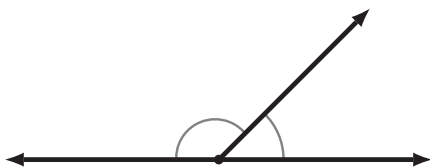
3 What kind of angle is this? acute



4 What kind of angle is this? straight



5 This diagram shows:



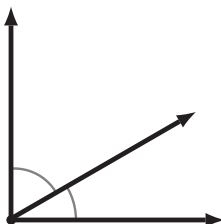
- Parallel Lines
- Perpendicular Lines
- Supplementary Angles
- Complementary Angles

6 This diagram shows:



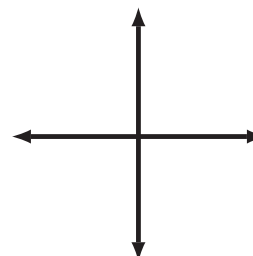
- Parallel Lines
- Perpendicular Lines
- Supplementary Angles
- Complementary Angles

7 This diagram shows:



- Parallel Lines
- Perpendicular Lines
- Supplementary Angles
- Complementary Angles

8 This diagram shows:



- Parallel Lines
- Perpendicular Lines
- Supplementary Angles
- Complementary Angles